

Name:

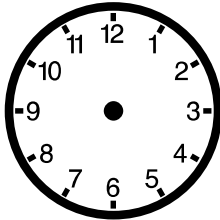

Klasse:

Datum:

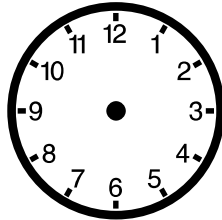
# Uhrzeit

Zeichne die Zeiger passend zur Uhrzeit in die Uhren ein.

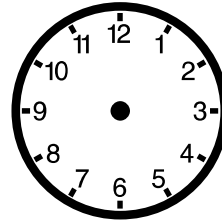
Viel Erfolg!



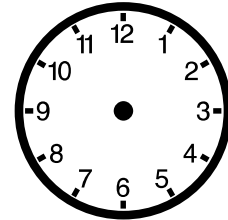
19:05 Uhr



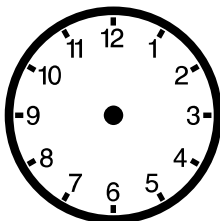
2:35 Uhr



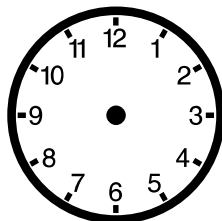
13:55 Uhr



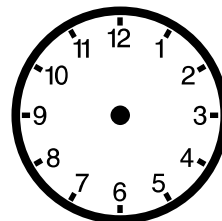
5:40 Uhr



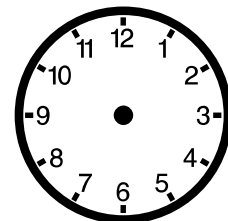
23:20 Uhr



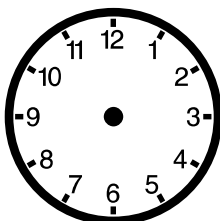
18:10 Uhr



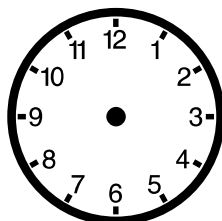
1:40 Uhr



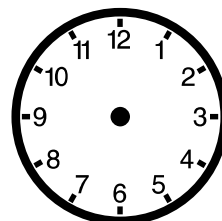
12:25 Uhr



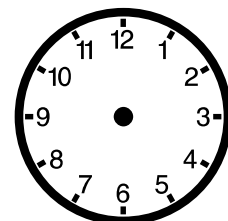
17:05 Uhr



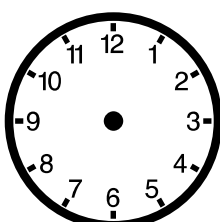
3:55 Uhr



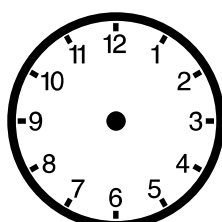
16:20 Uhr



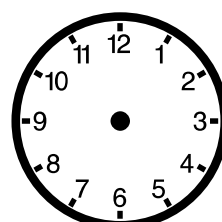
9:35 Uhr



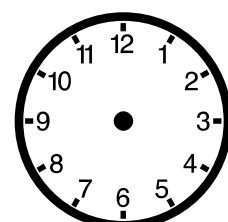
0:40 Uhr



14:25 Uhr



10:40 Uhr



18:55 Uhr

Name:

Klasse:



Datum:

Lösung


# Uhrzeit

Zeichne die Zeiger passend zur Uhrzeit in die Uhren ein.


Viel Erfolg!




19:05 Uhr




2:35 Uhr



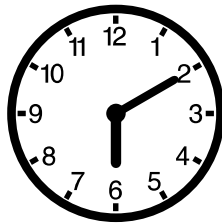
13:55 Uhr




5:40 Uhr



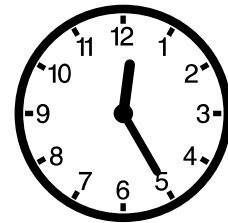
23:20 Uhr




18:10 Uhr




1:40 Uhr




12:25 Uhr




17:05 Uhr




3:55 Uhr




16:20 Uhr




9:35 Uhr




8:40 Uhr



14:25 Uhr



10:40 Uhr



18:55 Uhr